

Centre No.						Paper Reference						Surname	Initial(s)	
Candidate No.						1	3	8	0	/	4	H	Signature	

Paper Reference(s)

1380/4H

Edexcel GCSE

Mathematics (Linear) – 1380

Paper 4 (Calculator)

Higher Tier

Monday 1 June 2009 – Morning

Time: 1 hour 45 minutes

Examiner's use only

--	--	--

Team Leader's use only

--	--	--



Materials required for examination

Ruler graduated in centimetres and millimetres, protractor, compasses, pen, HB pencil, eraser, calculator. Tracing paper may be used.

Items included with question papers

Nil

Instructions to Candidates

In the boxes above, write your centre number, candidate number, your surname, initials and signature.

Check that you have the correct question paper.

Answer ALL the questions. Write your answers in the spaces provided in this question paper.

You must NOT write on the formulae page.

Anything you write on the formulae page will gain NO credit.

If you need more space to complete your answer to any question, use additional answer sheets.

Information for Candidates

The marks for individual questions and the parts of questions are shown in round brackets: e.g. (2).

There are 26 questions in this question paper. The total mark for this paper is 100.

There are 24 pages in this question paper. Any blank pages are indicated.

Calculators may be used.

If your calculator does not have a π button, take the value of π to be 3.142 unless the question instructs otherwise.

Advice to Candidates

Show all stages in any calculations.

Work steadily through the paper. Do not spend too long on one question.

If you cannot answer a question, leave it and attempt the next one.

Return at the end to those you have left out.

This publication may be reproduced only in accordance with Edexcel Limited copyright policy. ©2009 Edexcel Limited.

Printer's Log. No.

N34731A

W850/R1380/57570 6/6/6/3



Turn over

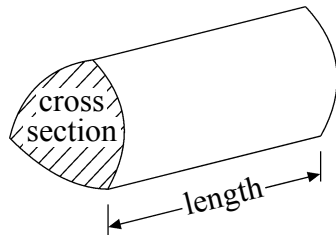
edexcel 
advancing learning, changing lives

GCSE Mathematics (Linear) 1380

Formulae: Higher Tier

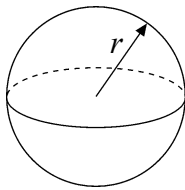
**You must not write on this formulae page.
Anything you write on this formulae page will gain NO credit.**

Volume of a prism = area of cross section \times length



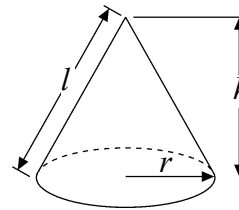
Volume of sphere = $\frac{4}{3}\pi r^3$

Surface area of sphere = $4\pi r^2$

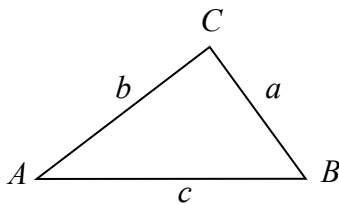


Volume of cone = $\frac{1}{3}\pi r^2 h$

Curved surface area of cone = $\pi r l$



In any triangle ABC



The Quadratic Equation

The solutions of $ax^2 + bx + c = 0$

where $a \neq 0$, are given by

$$x = \frac{-b \pm \sqrt{b^2 - 4ac}}{2a}$$

Sine Rule $\frac{a}{\sin A} = \frac{b}{\sin B} = \frac{c}{\sin C}$

Cosine Rule $a^2 = b^2 + c^2 - 2bc \cos A$

Area of triangle = $\frac{1}{2} ab \sin C$



Answer ALL TWENTY SIX questions.

Write your answers in the spaces provided.

You must write down all stages in your working.

1. Tania went to Italy.
She changed £325 into euros (€).

The exchange rate was £1 = €1.68

- (a) Change £325 into euros (€).

€
(2)

When she came home she changed €117 into pounds.

The new exchange rate was £1 = €1.50

- (b) Change €117 into pounds.

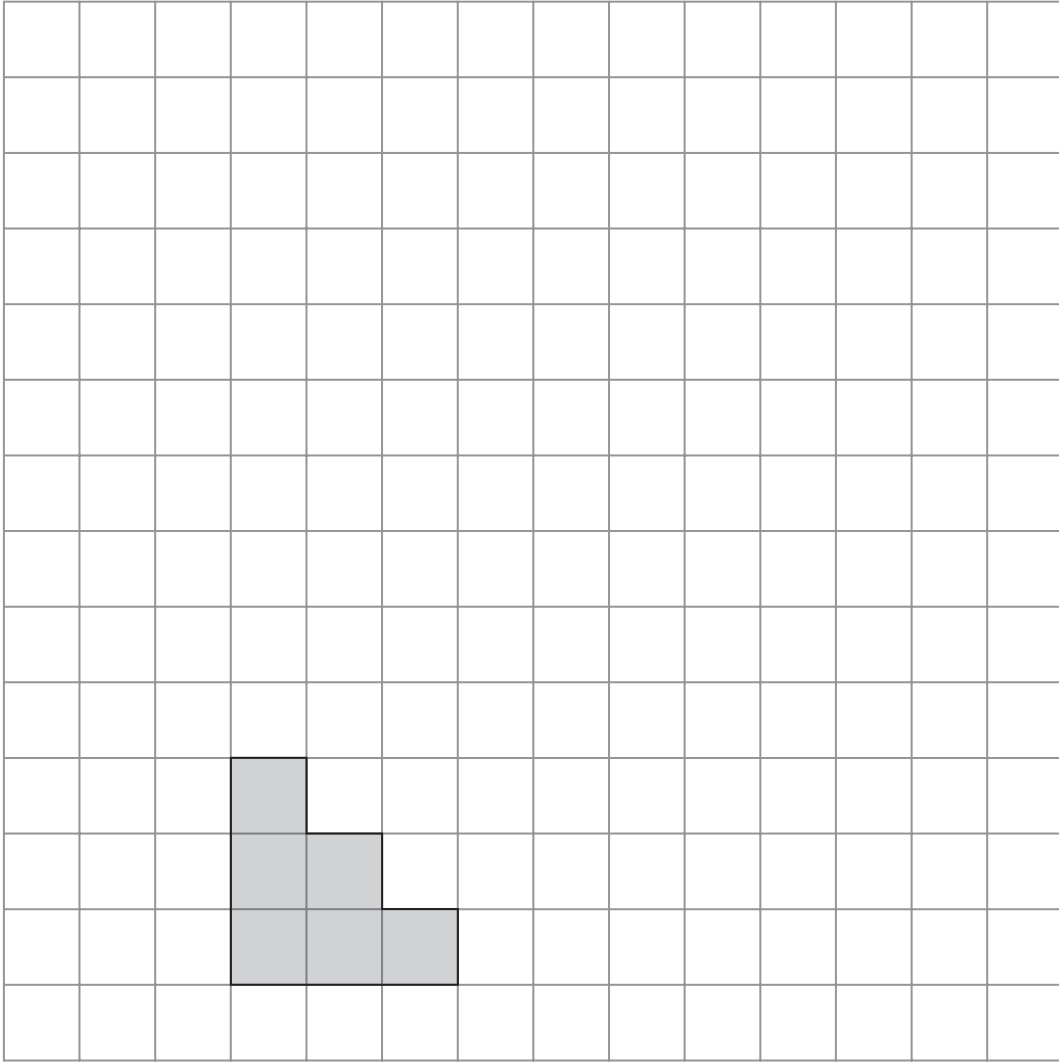
£
(2)

(Total 4 marks)

Q1



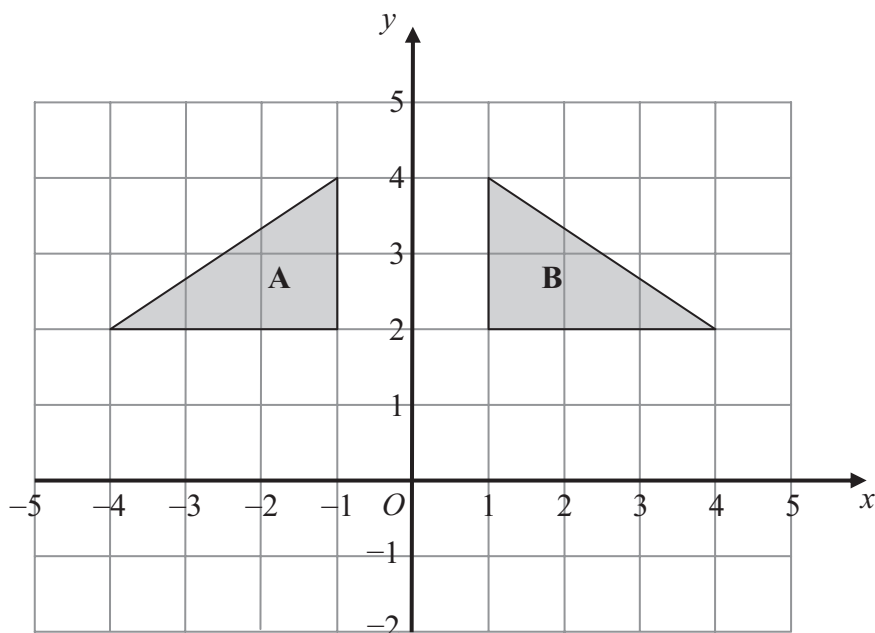
2.



(a) On the grid, draw an enlargement, scale factor 2, of the shaded shape.

(2)





(b) Describe fully the single transformation that maps triangle A onto triangle B.

..... (2)

(Total 4 marks)

Q2

3. The n th term of a number sequence is $n^2 + 1$

Write down the first three terms of the sequence.

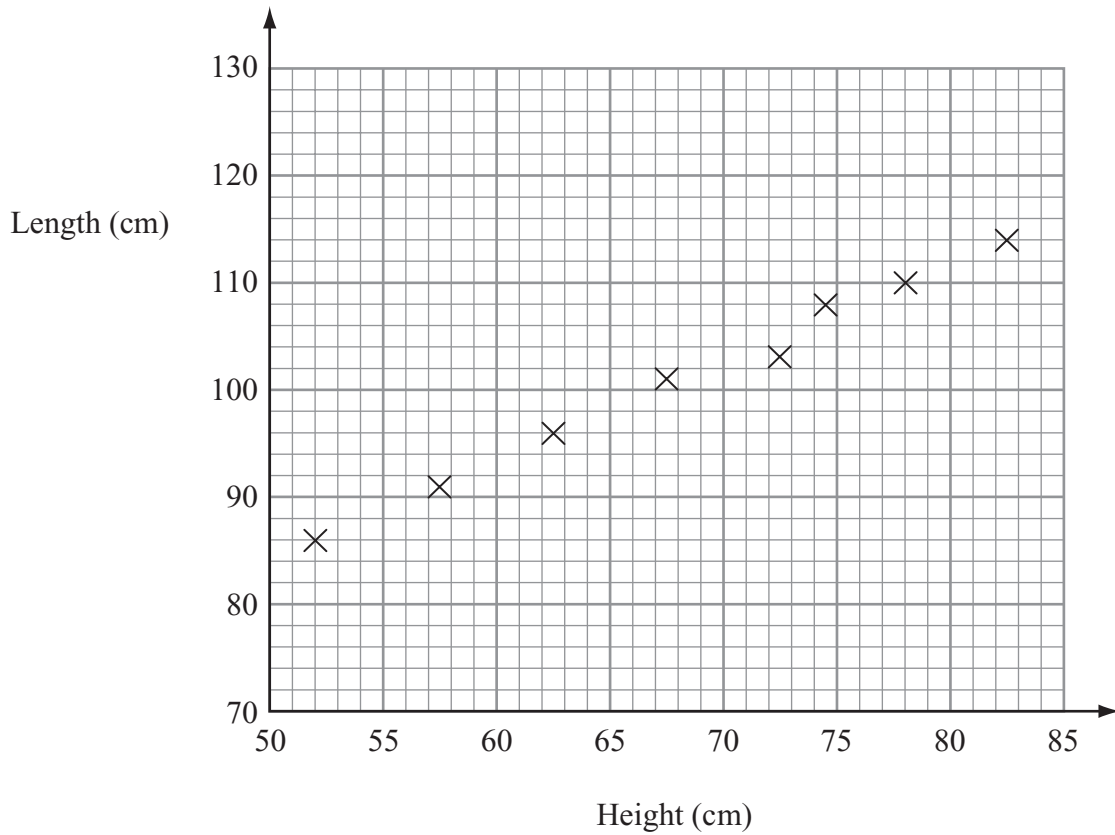
.....

(Total 2 marks)

Q3



4. The scatter graph shows information about eight sheep. It shows the height and the length of each sheep.



The table gives the height and the length of two more sheep.

Height (cm)	65	80
Length (cm)	100	110

- (a) On the scatter graph, plot the information from the table. (1)

- (b) Describe the relationship between the height and the length of these sheep.
 (1)

The height of a sheep is 76 cm.

- (c) Estimate the length of this sheep.
cm (2)

(Total 4 marks)

Q4



5. Julie buys 19 identical calculators.
The total cost is £143.64

Work out the total cost of 31 of these calculators.

£

(Total 3 marks)

Q5

6. $F = 1.8C + 32$

- (a) Work out the value of F when $C = -8$

.....
(2)

- (b) Work out the value of C when $F = 68$

.....
(2)

(Total 4 marks)

Q6



7. The diagram shows the position of two boats, P and Q .



The bearing of a boat R from boat P is 060°
The bearing of boat R from boat Q is 310°

In the space above, draw an accurate diagram to show the position of boat R .
Mark the position of boat R with a cross (\times). Label it R .

(Total 3 marks)

Q7



8. There are some sweets in a bag.

18 of the sweets are toffees.

12 of the sweets are mints.

- (a) Write down the ratio of the number of toffees to the number of mints.
Give your ratio in its simplest form.

..... :
(2)

There are some oranges and apples in a box.

The total number of oranges and apples is 54

The ratio of the number of oranges to the number of apples is 1 : 5

- (b) Work out the number of apples in the box.

.....
(2)

(Total 4 marks)

Q8



9. The equation

$$x^3 + 20x = 71$$

has a solution between 2 and 3

Use a trial and improvement method to find this solution.

Give your answer correct to one decimal place.

You must show **ALL** your working.

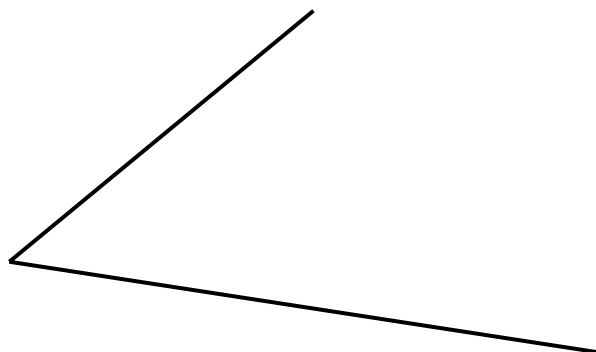
$x = \dots\dots\dots$

(Total 4 marks)

Q9



10. Use ruler and compasses to **construct** the bisector of this angle.
You must show all your construction lines.



Q10

(Total 2 marks)

11. Tarish says,

‘The sum of two prime numbers is always an even number’.

He is **wrong**.
Explain why.

.....

.....

Q11

(Total 2 marks)



12. Sethina recorded the times, in minutes, taken to repair 80 car tyres. Information about these times is shown in the table.

Time (t minutes)	Frequency		
$0 < t \leq 6$	15		
$6 < t \leq 12$	25		
$12 < t \leq 18$	20		
$18 < t \leq 24$	12		
$24 < t \leq 30$	8		

Calculate an estimate for the mean time taken to repair each car tyre.

..... minutes

(Total 4 marks)

Q12



13. Here is a tile in the shape of a semicircle.

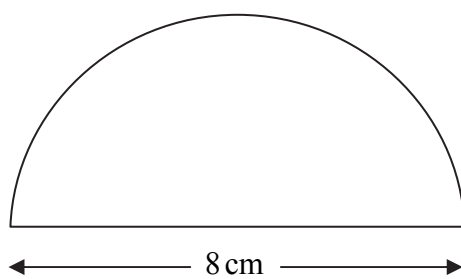


Diagram **NOT** accurately drawn

The diameter of the semicircle is 8 cm.

Work out the perimeter of the tile.
Give your answer correct to 2 decimal places.

..... cm

(Total 3 marks)

Q13



14. (a) Simplify $a \times a \times a$

.....
(1)

(b) Expand $5(3x - 2)$

.....
(1)

(c) Expand $3y(y + 4)$

.....
(2)

(d) Expand and simplify $2(x - 4) + 3(x + 2)$

.....
(2)

(e) Expand and simplify $(x + 4)(x - 3)$

.....
(2)

(Total 8 marks)

Q14



15. Work out $\frac{4.6 + 3.85}{3.2^2 - 6.51}$

Write down all the numbers on your calculator display.

Q15

.....
(Total 2 marks)

16. (a) Simplify $t^6 \times t^2$

.....
(1)

(b) Simplify $\frac{m^8}{m^3}$

.....
(1)

(c) Simplify $(2x)^3$

.....
(2)

(d) Simplify $3a^2h \times 4a^5h^4$

.....
(2)

Q16

(Total 6 marks)



17.

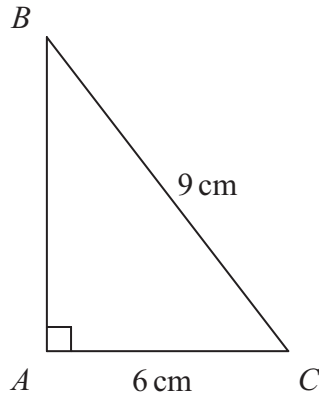


Diagram **NOT** accurately drawn

ABC is a right-angled triangle.

$AC = 6$ cm.

$BC = 9$ cm.

Work out the length of AB .

Give your answer correct to 3 significant figures.

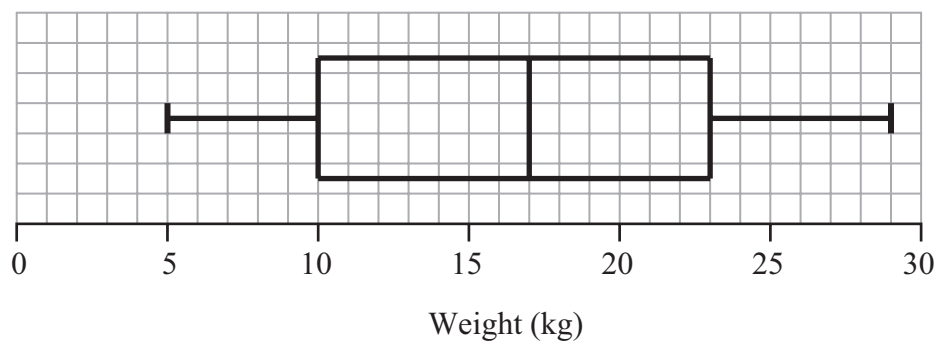
..... cm

(Total 3 marks)

Q17



18. The box plot gives information about the distribution of the weights of bags on a plane.



(a) Jean says the heaviest bag weighs 23 kg.

She is **wrong**.
Explain why.

.....
.....
(1)

(b) Write down the median weight.

..... kg
(1)

(c) Work out the interquartile range of the weights.

..... kg
(1)

There are 240 bags on the plane.

(d) Work out the number of bags with a weight of 10 kg or less.

.....
(2)

(Total 5 marks)

Q18



19. Toby invested £4500 for 2 years in a savings account.
He was paid 4% per annum compound interest.

(a) How much did Toby have in his savings account after 2 years?

£
(3)

Jaspir invested £2400 for n years in a savings account.
He was paid 7.5% per annum compound interest.

At the end of the n years he had £3445.51 in the savings account.

(b) Work out the value of n .

.....
(2)

(Total 5 marks)

Q19



20. Here is a right-angled triangle.

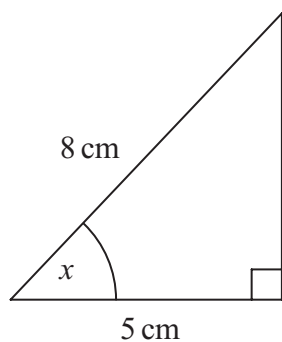


Diagram **NOT** accurately drawn

- (a) Calculate the size of the angle marked x .
Give your answer correct to 1 decimal place.

$x = \dots\dots\dots^\circ$
(3)

Here is another right-angled triangle.

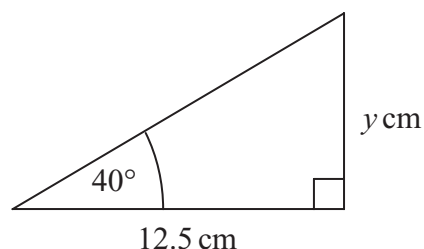


Diagram **NOT** accurately drawn

- (b) Calculate the value of y .
Give your answer correct to 1 decimal place.

$y = \dots\dots\dots$
(3)

(Total 6 marks)

Q20



21. 258 students each study one of three languages.
The table shows information about these students.

	Language studied		
	German	French	Spanish
Male	45	52	26
Female	25	48	62

A sample, stratified by the language studied and by gender, of 50 of the 258 students is taken.

- (a) Work out the number of male students studying Spanish in the sample.

.....
(2)

- (b) Work out the number of female students in the sample.

.....
(2)

(Total 4 marks)

Q21

22. Prove that $(3n + 1)^2 - (3n - 1)^2$ is a multiple of 4, for all positive integer values of n .

Q22

(Total 3 marks)



23.

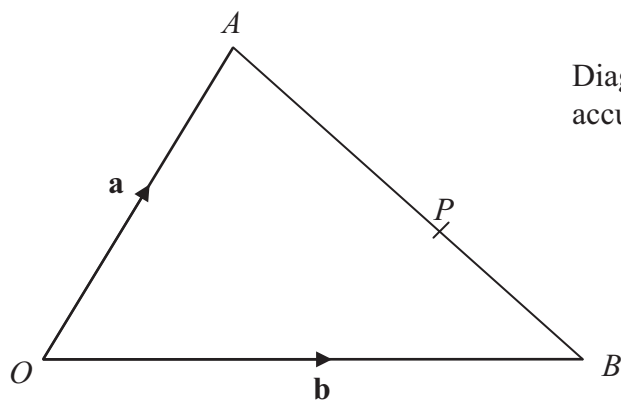


Diagram **NOT** accurately drawn

OAB is a triangle.

$$\vec{OA} = \mathbf{a}$$

$$\vec{OB} = \mathbf{b}$$

(a) Find the vector \vec{AB} in terms of \mathbf{a} and \mathbf{b} .

$$\vec{AB} = \dots\dots\dots \quad (1)$$

P is the point on AB such that $AP : PB = 3 : 2$

(b) Show that $\vec{OP} = \frac{1}{5}(2\mathbf{a} + 3\mathbf{b})$

(3) Q23

(Total 4 marks)



24.

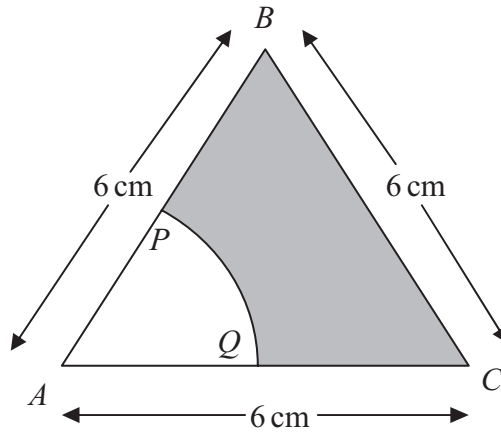


Diagram **NOT** accurately drawn

The diagram shows an equilateral triangle ABC with sides of length 6 cm .

P is the midpoint of AB .

Q is the midpoint of AC .

APQ is a sector of a circle, centre A .

Calculate the area of the shaded region.

Give your answer correct to 3 significant figures.

..... cm^2

(Total 4 marks)

Q24



25. Simplify fully $\frac{x^2 - 8x + 15}{2x^2 - 7x - 15}$

Leave
blank

Q25

.....
(Total 3 marks)

26. Phil has 20 sweets in a bag.

5 of the sweets are orange.

7 of the sweets are red.

8 of the sweets are yellow.

Phil takes at random **two** sweets from the bag.

Work out the probability that the sweets will **not** be the same colour.

Q26

.....
(Total 4 marks)

TOTAL FOR PAPER: 100 MARKS

END



BLANK PAGE

